



*FREE*

*Doctor Who  
inspired Math  
Printable Pack*



Read the problem. Write a number sentence to go with it. Answer the question.  
The Doctor is depending on your ability to solve this.

1) The Doctor travels back in time 6 times. He picks up a new companion and travels back in time 4 more times. Write a number sentence to show how many times the Doctor has traveled back in time.

---

How many times did the Doctor travel back in time?

---

2) Clara makes 5 Souffles. 4 of them are no good. Write a number sentence to show how many souffles are good.

---

How many souffles are good?

---

3) 7 Ood sing a song to the Doctor. 4 Ood join in. Write a number sentence to show how many Ood are singing to the Doctor.

---

How many Oods sing to the Doctor?

---

4) The Doctor has 3 companions. 1 companion chooses to side with the Master. How many companions does the Doctor have left?

---

How many companions does the Doctor have left?

---



It's time for some Wibbly Wobbly Timey Wimey Stuff!  
You have 1 minute to solve as many of these problems as you can.

$$\begin{array}{r} 5 \\ +7 \\ \hline \end{array}$$

$$\begin{array}{r} 6 \\ +4 \\ \hline \end{array}$$

$$\begin{array}{r} 7 \\ +2 \\ \hline \end{array}$$

$$\begin{array}{r} 3 \\ +7 \\ \hline \end{array}$$

$$\begin{array}{r} 9 \\ +4 \\ \hline \end{array}$$

$$\begin{array}{r} 8 \\ +4 \\ \hline \end{array}$$

$$\begin{array}{r} 8 \\ +8 \\ \hline \end{array}$$

$$\begin{array}{r} 9 \\ +9 \\ \hline \end{array}$$

$$\begin{array}{r} 8 \\ +6 \\ \hline \end{array}$$

$$\begin{array}{r} 4 \\ +4 \\ \hline \end{array}$$

$$\begin{array}{r} 1 \\ +8 \\ \hline \end{array}$$

$$\begin{array}{r} 3 \\ +6 \\ \hline \end{array}$$



It's time for some Wibbly Wobbly Timey Wimey Stuff!  
You have 1 minute to solve as many of these problems as you can.

$$\begin{array}{r} 8 \\ +9 \\ \hline \end{array}$$

$$\begin{array}{r} 3 \\ +4 \\ \hline \end{array}$$

$$\begin{array}{r} 7 \\ +8 \\ \hline \end{array}$$

$$\begin{array}{r} 3 \\ +9 \\ \hline \end{array}$$

$$\begin{array}{r} 9 \\ +4 \\ \hline \end{array}$$

$$\begin{array}{r} 8 \\ +3 \\ \hline \end{array}$$

$$\begin{array}{r} 6 \\ +9 \\ \hline \end{array}$$

$$\begin{array}{r} 9 \\ +9 \\ \hline \end{array}$$

$$\begin{array}{r} 8 \\ +6 \\ \hline \end{array}$$

$$\begin{array}{r} 5 \\ +4 \\ \hline \end{array}$$

$$\begin{array}{r} 6 \\ +8 \\ \hline \end{array}$$

$$\begin{array}{r} 5 \\ +6 \\ \hline \end{array}$$



The Doctor is having a hard time figuring out which coins to use while on Earth. Be a good companion and help him know what to use.

1) The Doctor needs 75 cents. He has only dimes and pennies. How many of each will he use?

Dimes \_\_\_\_\_ Pennies \_\_\_\_\_

2) The Doctor need 83 cents. He has only dimes and pennies. How many of each will he use?

Dimes \_\_\_\_\_ Pennies \_\_\_\_\_

3) The Doctor needs 28 cents. He has nickles and pennies. How many of each will he use?

Nickles \_\_\_\_\_ Pennies \_\_\_\_\_

4) The Doctor needs 62 cents. He has nickles and pennies. How many of each will he use?

Nickles \_\_\_\_\_ Pennies \_\_\_\_\_

5) The Doctor needs 48 cents. He has dimes, nickles, and pennies. How many of each will he use?

Dimes \_\_\_\_\_ Nickles \_\_\_\_\_ Pennies \_\_\_\_\_

6) The Doctor needs 17 cents. He has dimes, nickles, and pennies. How many of each will he use?


Dimes \_\_\_\_\_ Nickles \_\_\_\_\_ Pennies \_\_\_\_\_

7) The Doctor needs 54 cents. He has dimes, nickles, and pennies. How many of each will he use?

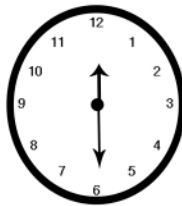
Dimes \_\_\_\_\_ Nickles \_\_\_\_\_ Pennies \_\_\_\_\_



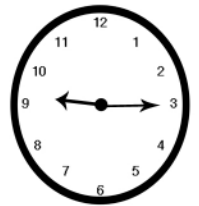
The Doctor forgot how to tell time after an extended time traveling adventure. Please help the Doctor remember how to tell time.




□  
□



□  
□



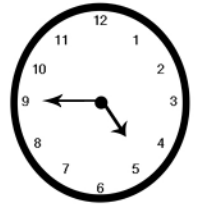
□  
□




□  
□



□  
□



□  
□



□  
□



□  
□



□  
□